

pg. 113

1.	2.	10.
11.	12.	13.

Describe the translation in each function. Then graph the function.

14.

Translation:

15.

Translation:

16.

Translation:

17.

Translation:

18.

Translation:

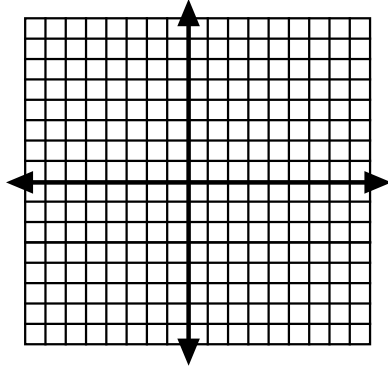
19.

Translation:

Describe the reflection in each function. Then graph the function.

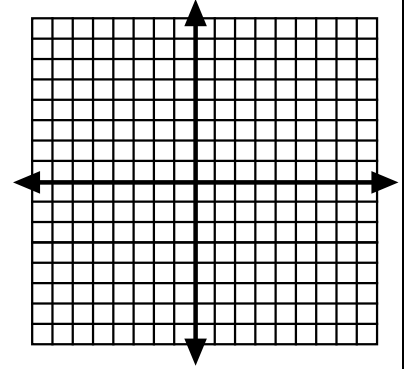
21.

Translation:



24.

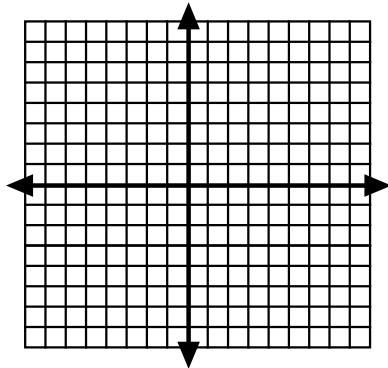
Translation:



Describe the dilation in each function. Then graph the function.

28.

Translation:



30.

Translation:

