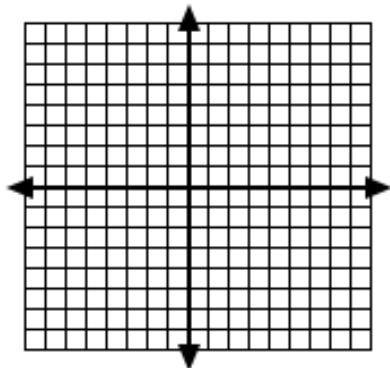


Algebra 2
Graphing Review

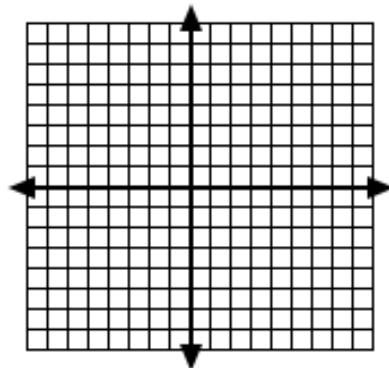
Name _____

Directions: Graph each equation using any method.

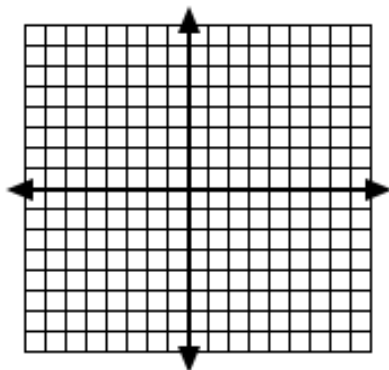
1. $y = -3x + 4$



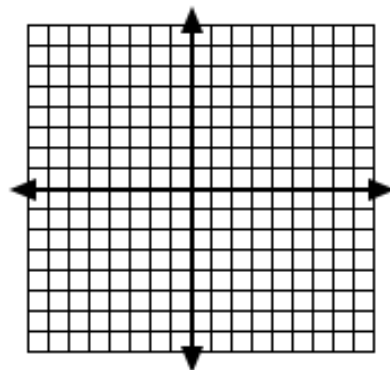
2. $y = \frac{2}{3}x - 5$



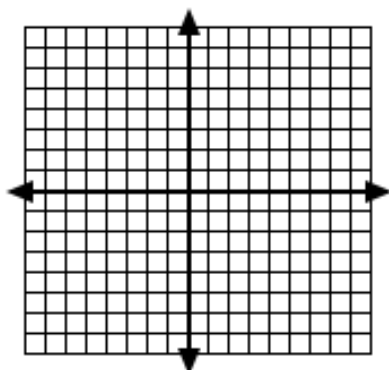
3. $y = x$



4. $5x - 3y = -15$



5. $x = 2$



6. $-4y = 8$

